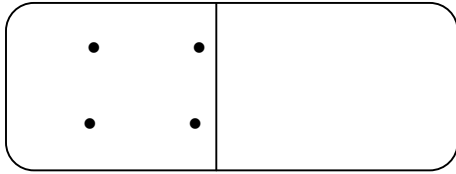
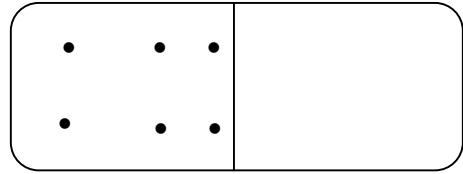


Exercice 1

J'ajoute les points sur le domino pour obtenir le nombre 9 puis je complète les étiquettes :



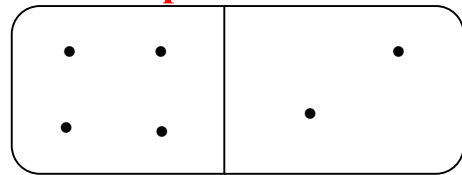
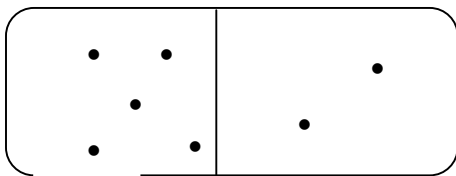
4 + = 9



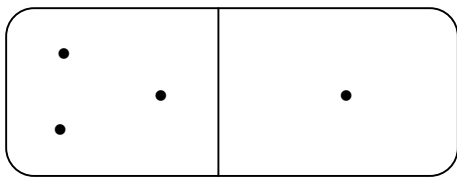
6 + = 9

Exercice 2

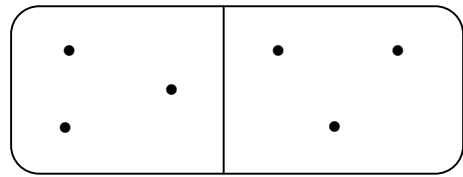
J'observe attentivement puis je complète les opérations :



..... + 2 = 6



3 + 1 =




3 + = 6

Exercice 3

J'additionne les points des deux dés :



..... + =



..... + =

